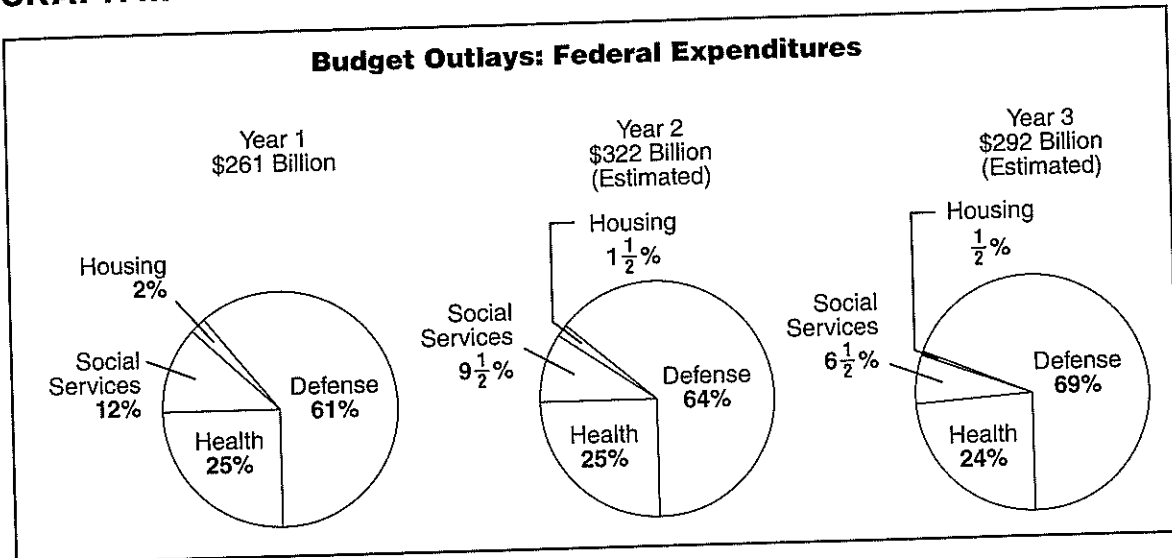


Practice Graph III

In some cases, more than one graph can be used to make comparisons. The following circle graphs show how the federal budget was estimated to change during three consecutive years.

GRAPH III



Source: U.S. Office of Management and Budget

Scanning Graph III

Fill in each blank as indicated.

- The amount of federal expenditures shown for Year 2 and Year 3 are _____ figures.
- The total budget for Year 2 and Year 3 is estimated to be \$_____ billion and \$_____ billion, respectively.
- According to Graph III, the federal government's budget is divided into these four main categories:

Reading Graph III

Decide whether each sentence is true or false and circle your answer.

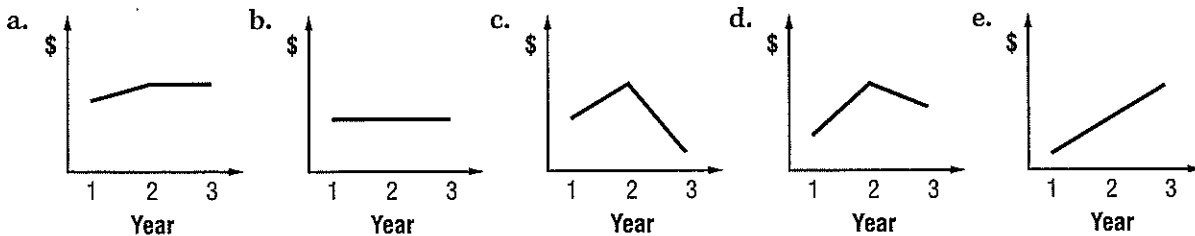
- | | | |
|--|------|-------|
| 4. In Year 1, 2% of federal expenditures was for housing. | True | False |
| 5. The percent of the federal budget allocated for defense is expected to decrease over the 3-year period. | True | False |
| 6. The budget outlay for defense in Year 3 is estimated to be 69%. | True | False |

Comprehension Questions

Answer each question by choosing the best multiple-choice response.

7. From Year 1 to Year 3, the percent allocated for which item will change the least?
- a. health
 - b. housing
 - c. social services
 - d. defense
8. What budget item was projected to be reduced more than any other by Year 3?
- a. defense
 - b. housing
 - c. social services
 - d. health

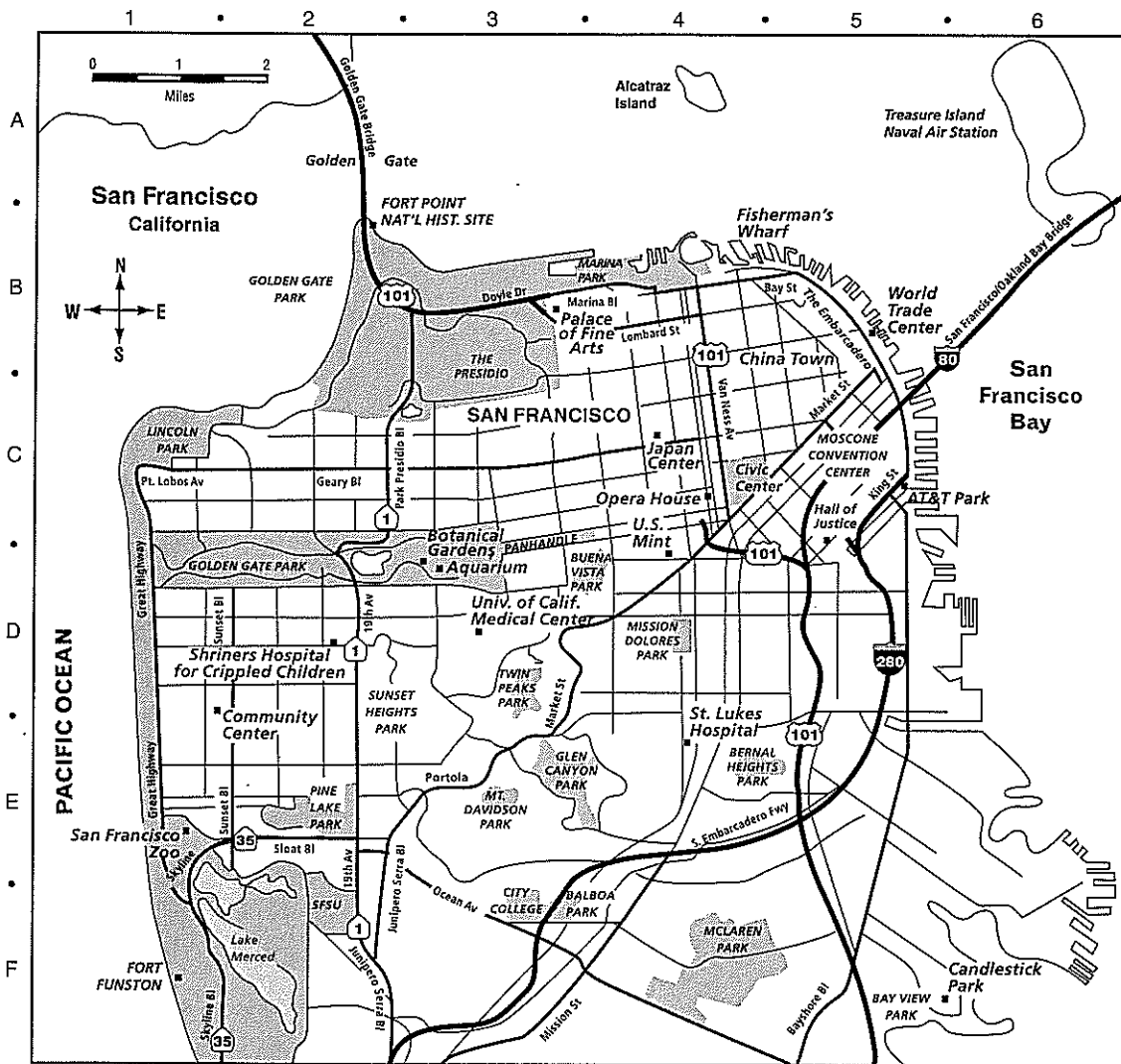
9. Which diagram best shows the total budget outlays?



10. Which statement best reflects the information in Graph III?

- a. For Year 1 to Year 3, there is a projected increase of total federal expenditures in all categories.
- b. For Year 1 to Year 3, there is a projected increase in the percentage of total federal expenditures going for defense.
- c. For Year 2, total federal expenditures were projected to be less than they were in Year 1 for both housing and health.
- d. Unemployment will increase in Year 3 because of decreasing federal expenditures for social services.

Practice Directional Map



POINT OF INTEREST	
Alcatraz Island	A-4
AT&T Park	C-5
Buena Vista Park	D-3
Candlestick Park	F-5
China Town	B-4
Civic Center	C-4
Community Center	D-1
Fisherman's Wharf	B-4
Glen Canyon Park	E-3
Golden Gate Bridge	A-2
Golden Gate Park	B-2
Hall of Justice	C-5
Japan Center	C-4
Lake Merced	F-2
Lincoln Park	C-1
Marina Park	B-4
Mt. Davidson Park	E-3
Opera House	C-4
Palace of Fine Arts	B-3
Pine Lake Park	E-2
San Francisco Zoo	E-1
Sunset Heights Park	D-2
U.S. Mint	C-4
World Trade Center	B-5


Scanning the Map

Fill in each blank as indicated.

1. The map shows points of interest and street names in the city of _____.
2. According to the index guide, Alcatraz Island is located in the map section _____ (letter-number).
3. San Francisco Bay surrounds San Francisco on both the north and _____ (direction) sides.

Reading the Map

Decide whether each sentence is true or false and circle your answer.

- | | | |
|--|------|-------|
| 4. Interstate  is also called the Southern Embarcadero Freeway where it passes through the city of San Francisco. | True | False |
| 5. Candlestick Park is more than 1 mile from San Francisco Bay. | True | False |
| 6. The Japan Center is near Van Ness Avenue and Geary Boulevard. | True | False |
| 7. Another name for Highway 1 is Park Presidio Blvd. | True | False |

Comprehension Questions

Answer each question by choosing the best multiple-choice response.

8. The Botanical Gardens (C-2) are located in
 - a. Buena Vista Park
 - b. Glen Canyon Park
 - c. Golden Gate Park
 - d. Candlestick Park
 - e. Mt. Davidson Park
9. The walking distance from the Japan Center to Fisherman's Wharf is about
 - a. 1 mile
 - b. 3 miles
 - c. 6 miles
 - d. 10 miles
 - e. 20 miles
10. The directional map of San Francisco contains the following information:
 - a. location and names of all streets
 - b. points of interest and major highway numbers
 - c. land and water elevation